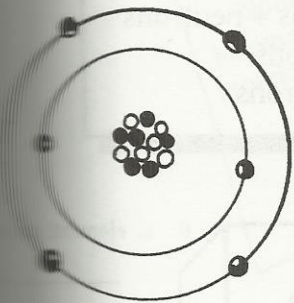


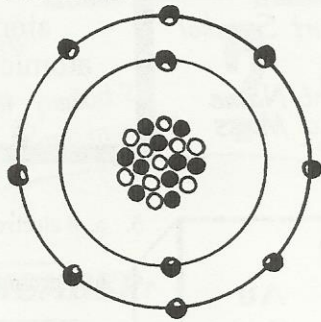
WHICH ATOM IS WHICH?

Every kind of atom has its own unique look. All the atoms of an element have this same look. Here's a chance for you to look at some atoms and tell what elements they are. Write the name of the element next to each atom. You may need to use the Periodic Table to help you out. (You can find one on page 119 of this book.)

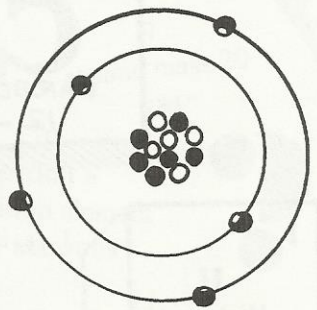
A.



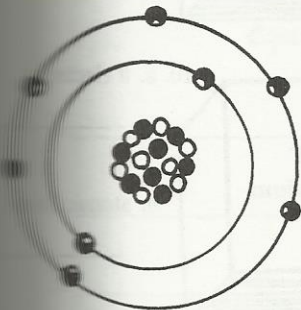
B.



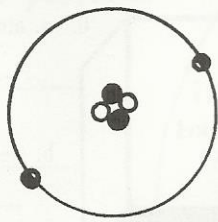
C.



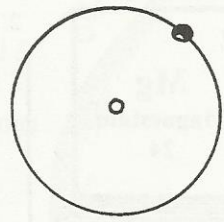
D.



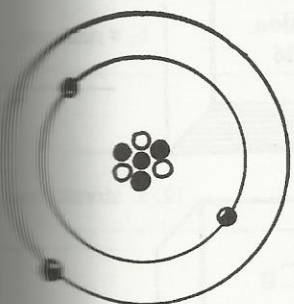
E.



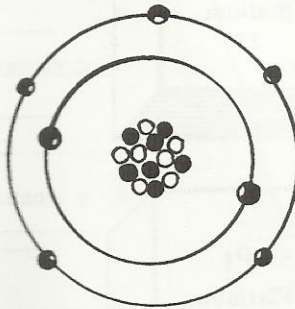
F.



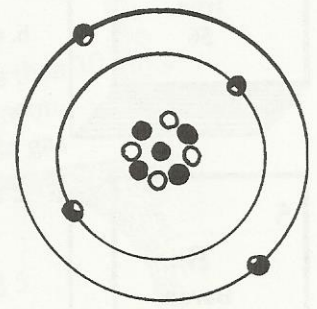
G.



H.



I.



Name _____